



ENTRANCE TEST
UNDER GRADUATE PROGRAMME

MIT's Institute of Design 2007-2008

Test Centre

Roll No.

Signature of Supervisor

Instructions:

1. Write the correct and complete **Roll No. on your answer sheet** without fail. Your Roll No. is mentioned in your Admit Card. (For example: 123U)
2. All the tests (Test 1 to 5) carry equal marks and you can choose to take any test first.
3. Total time for the Entrance Test allotted is 3 hours. Each question indicates the suggested time for completing that particular answer.
4. All electronic devices (including mobile phones) are to be switched off during the period of the Test.

Test 1

30 minutes
20 marks

ATTEMPT EITHER 1a) **or** 1 b):

1a) Maintaining the proportions, draw the chair as shown in the given sheet, in the following manner:

i) Double (enlarged) the given size

ii) Half (reduced) the given size

OR

1b) Draw a bed in relation to the given human figure in the drawing sheet.

Test 1 a)

ii) Half (reduced) the given scale
DRAW HERE



i) Double (enlarged) the given scale
DRAW HERE

Test 1 b)



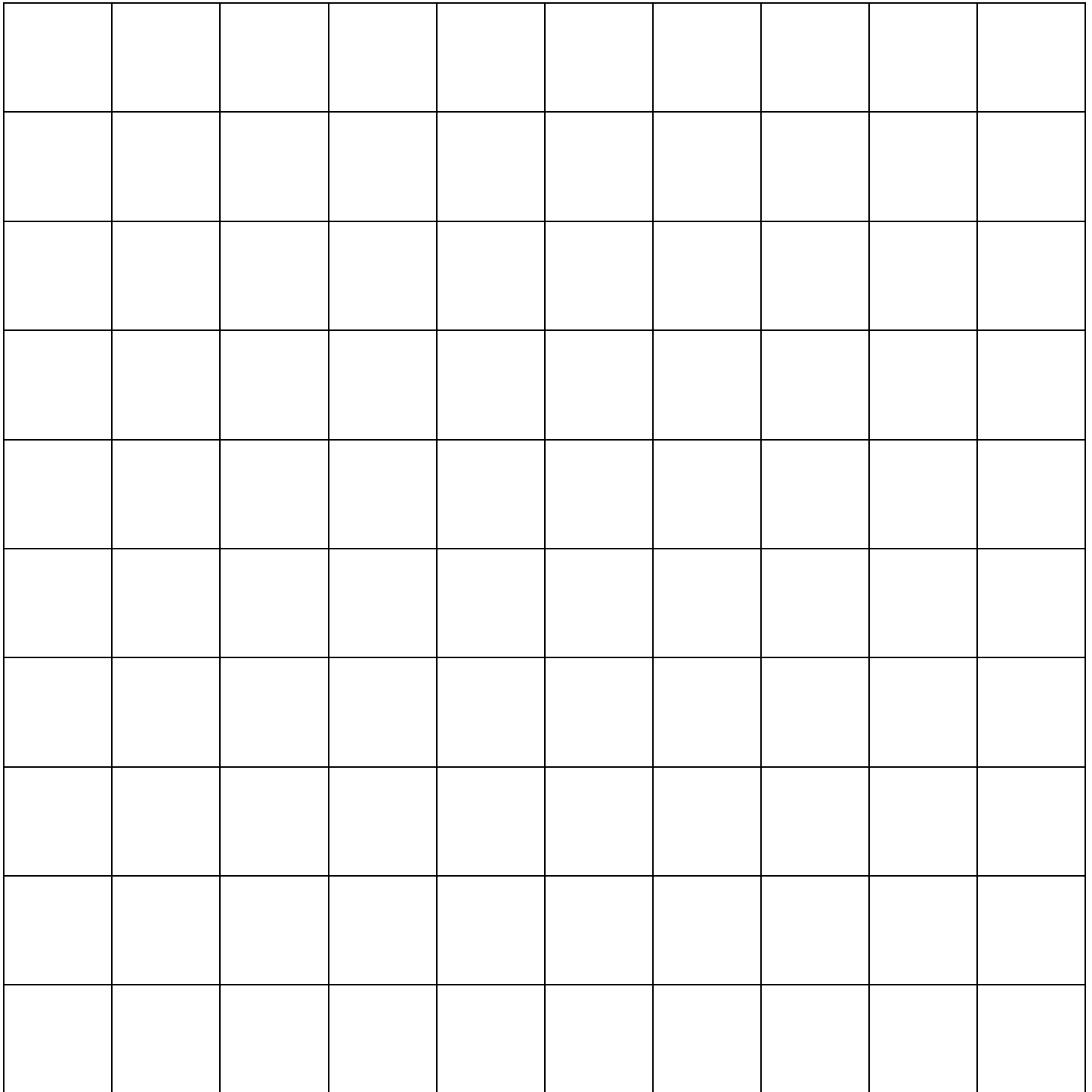
Test 2

40 minutes
20 marks

Make a composition in the square given below, using the coloured paper squares given to you. Your composition should show **any one** of the following ideas:

- a) Celebration b) Threat c) Chaos d) Friendship

NOTE: Do not cut or fold the given coloured paper squares. Explain your composition in the next page.



Explain your composition:



Test 3




40 minutes
20 marks

In the 5 frames given below, draw any **object OR scene** (situation) usually found in the following and describe each one of them in the space next to the respective frame.

- a) Railway Station
- b) Cyber Café
- c) Restaurant

Attempt **only one** of the above.





Test 4

40 minutes
20 marks

In the object given to you –

Name of the Object:

a) Identify its function

b) Briefly describe its working principle

c) How many parts does the object have?

(Continued on the next page)


d) Draw and describe 5 *alternative uses* of the object. You may change the scale (enlarge / reduce) of the object.

You may use both sides of this sheet.

Test 5


**30 minutes
20 marks**

Given below are two advertisements. Provide an **alternative** slogan (tag line) for any **one** only.



Slogan:

Explain the reasons for your slogan:



Slogan:

Explain the reasons for your slogan: